


# Homework Two

## Literacy

1. Complete the following Table:

Symbol	Name	Number of beats it lasts
		1
	Minim	
		
		1/4

2. Write the correct time signature at the start each excerpt of music:

(a)




(b)



(c)




3a. Draw a sharp sign in front of each note. Then write the names of the notes indicated.



3b. Draw the notes indicated.



4a. Draw a flat sign in front of each note. Then write the names of the notes indicated.



4b. Draw the notes indicated.



My Homework Rating

