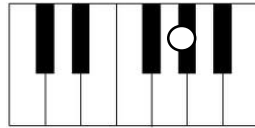
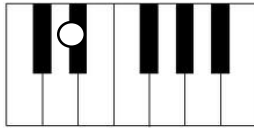
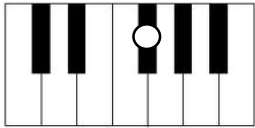
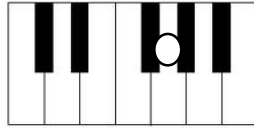
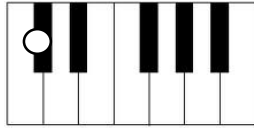
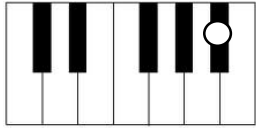


S2 Homework One

1. Look at the keyboards below and name each of the notes with a white dot.





2. The **SHORTEST INTERVAL** (distance) in music is known as a _____.

3. Name the following **ACCIDENTALS**.

b _____

4. Name the notes below in full – *for example the first one is 'F Sharp'.*







5. Solve the following musical sums.

$$♩ + ♩ + ♩ - ♩ =$$

$$♩ + ♩ + ♩ + ♩ =$$

My Homework Rating



