



S1 Homework Two


Learning Outcome: Using numeracy and literacy skills you will be able to identify and understand the names and values of musical notation.

Complete the following:

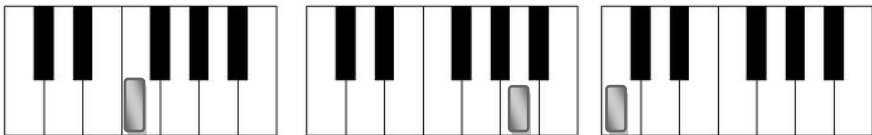
1.  = _____ beats and is known as a _____

 = _____ beats and is known as a _____

 = _____ beats and is known as a _____

 = _____ beats and is known as a _____

2. Look at the mini keyboards and name the shaded notes on the line below.




3. Look at the following notes and name both the **TYPE OF NOTE** and the **LETTER NAME** of the note.



Note type _____

Letter _____

4. Look at the following notes and name both the **TYPE OF NOTE** and the **LETTER NAME** of the note.



Note type _____

Letter _____

5. Solve these musical sums.

 +  = _____

 +  +  = _____

My Homework Rating

