


S1 Homework One

Learning Outcome: You will be able to read, understand and use the lines and spaces on the treble clef.

Complete the following:


1. Music is written on a _____ which consists of _____ lines and _____ spaces.

2. This sign  which is found at the beginning of a staff is called a _____.


3. The rhyme used to remember the letter names of the lines is _____

4. The letter names on the spaces spell the word _____


5. On the staff below, draw four treble clef signs.




6. Name the following notes on the staff below.



7. Name the following notes on the staff below.



8. Work out the following words and write them on the lines below.



My Homework Rating

